

Day 1-2 AP US History: Early Inhabitants of the Americas

Directions: Use the internet and/or your textbook to complete your section the table below. Tomorrow in class you will use this information to create a map of the political, economic, and demographic landscape of the Americas before European settlement.

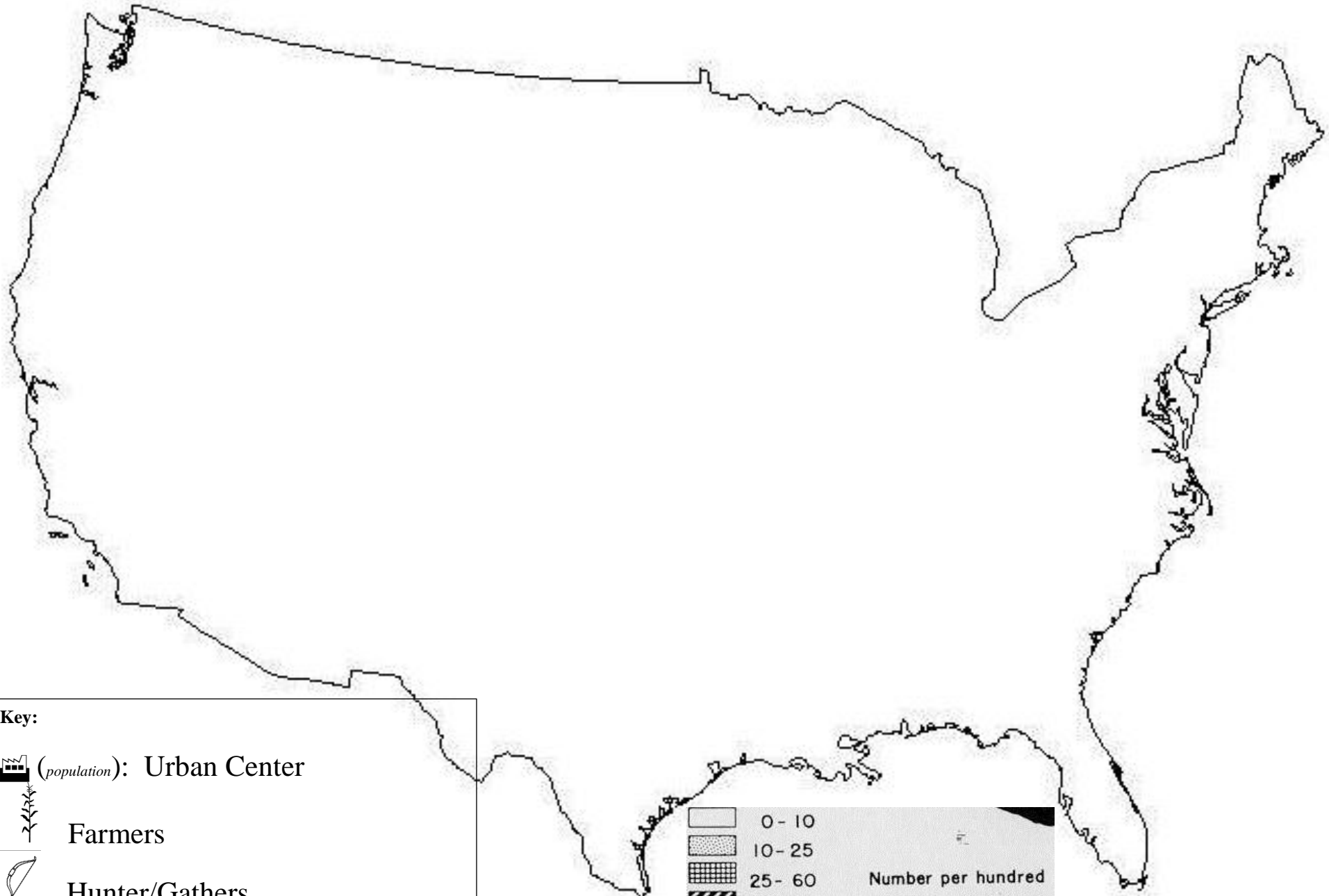
seat	Indian Society	Location	Subsistence Pattern/Economy	Population Density (population/land area in sq kilometers=)	Urban Centers with population	Political Organization
1	Apache					
2	Catawba					
3	Cherokee					
4	Cheyenne					
5	Chinook					
6	Choctaw					
7	Choctaw					

8	Creek					
9	Delaware					
10	Hopi					
11	Illinois					
12	Iroquois					
13	Kiowa					
14	Massachusett					
15	Miami					
16	Mississippian					





17	Narragansett					
18	Natchez					
19	Navajo					
20	Pawnee					
21	Pequot					
22	Pomo					
23	Potawatomi					
24	Powhatan					
25	Pueblo					







26	Shawnee					
27	Shoshone					
28	Sioux					
29	Timucua					
30	Wampanoag					
31	Winnebago					
32	Yakima					
33	Zuni					

Directions: Add your information to the map below then pass it to a classmate, add their information and repeat. Do not add political information to the map.



Key:

-  (population): Urban Center
-  Farmers
-  Hunter/Gathers
- T** Trade
-  Fishing

	0 - 10
	10 - 25
	25 - 60
	60 - 150
	150 - 375
	375 or more

Number per hundred square kilometers